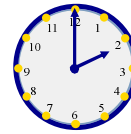
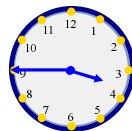
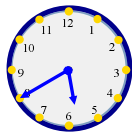
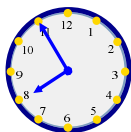
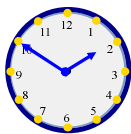


WHAT'S THE TIME?



It's quarter ~~past~~ twenty ~~to~~ six.
It's ten ~~past~~ seven ~~to~~ the quarter ~~to~~ four.
It's ~~ten~~ ~~past~~ ~~three~~.